


Adı : .....  
Soyadı: .....

1 . Sınıf  
Matematik

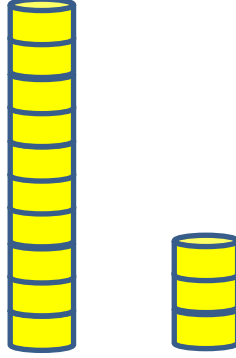
Doğal Sayılar  
Basamak Değeri-2

Kaç tane olduğunu yazınız.

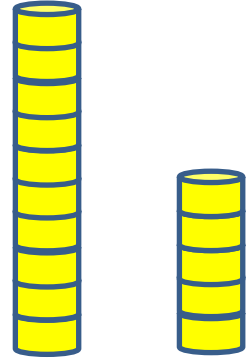


1 onluk 1 birlik

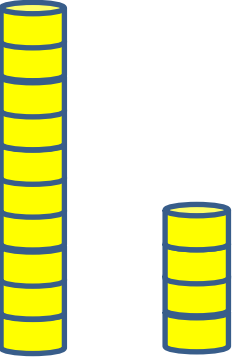
1 1



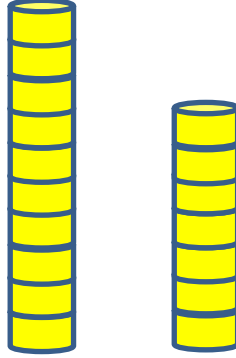
onluk birlik



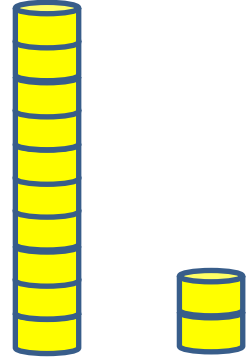
onluk birlik



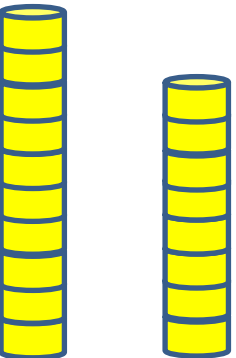
onluk birlik



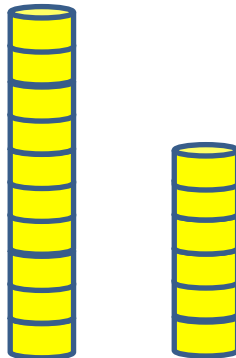
onluk birlik



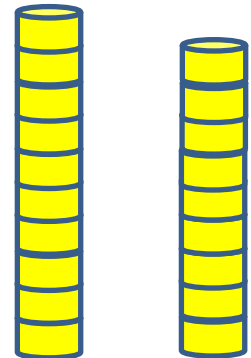
onluk birlik



onluk birlik



onluk birlik

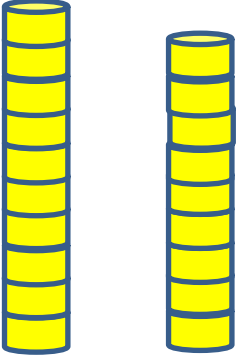


onluk birlik


Adı : .....  
Soyadı: .....

1 . Sınıf  
Matematik

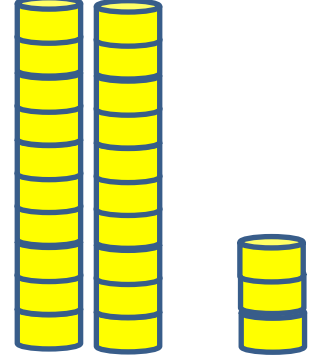
Doğal Sayılar  
Basamak Değeri-2




..... onluk ..... birlik




..... onluk ..... birlik




..... onluk ..... birlik



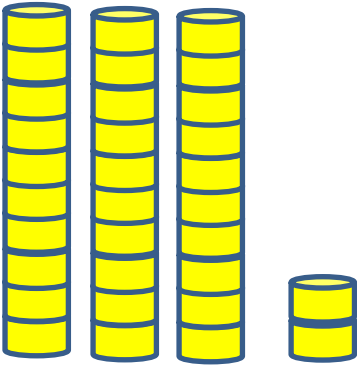
..... onluk ..... birlik



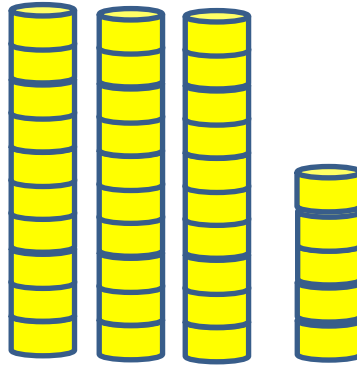
..... onluk ..... birlik



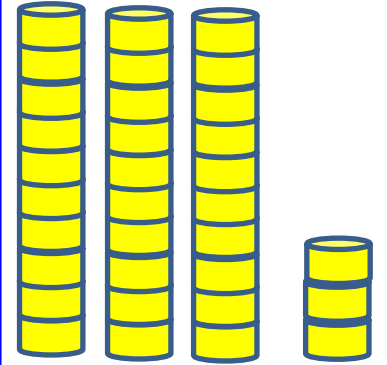
..... onluk ..... birlik



..... onluk ..... birlik



..... onluk ..... birlik



..... onluk ..... birlik